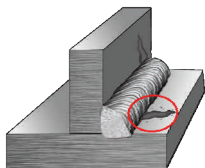


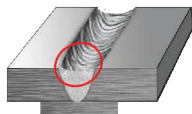
Discontinuities & Defects Identification

Directions:


Match the picture of the discontinuity or defect with the proper name.




1. _____



2. _____



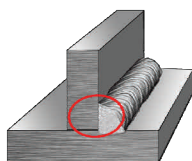
3. _____



4. _____



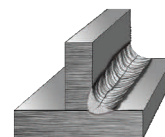
5. _____




6. _____



7. _____



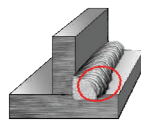
8. _____



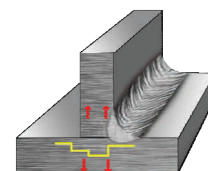
9. _____



10. _____



11. _____



12. _____

A. Arc Strike

B. Crack

C. Delamination

D. Inadequate Joint Penetration

E. Inclusions

F. Incomplete Fusion

G. Lamellar Tears

H. Lamination

I. Overlap

J. Porosity

K. Undercut

L. Underfill